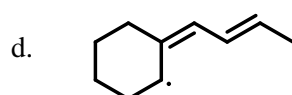
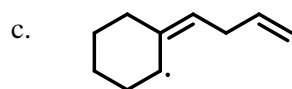
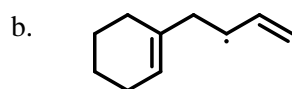
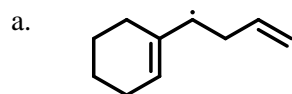


Quiz #6 Name _____

There is a total of 15 points for this quiz.

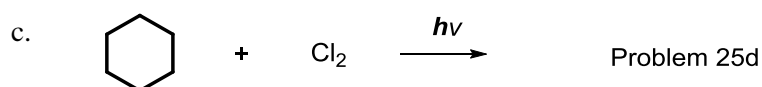
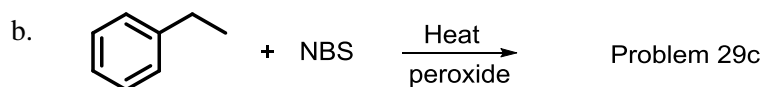
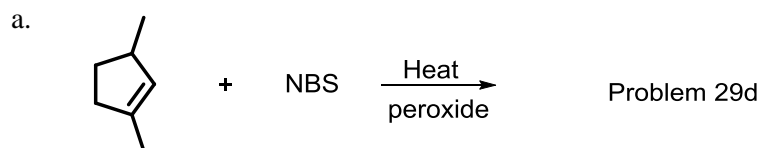
Answer all questions in the space provided.

[I] Draw the resonance contributors for the following radicals. (4 points)

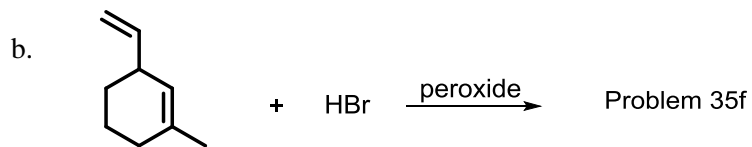
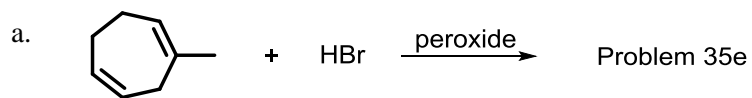


Problem 20

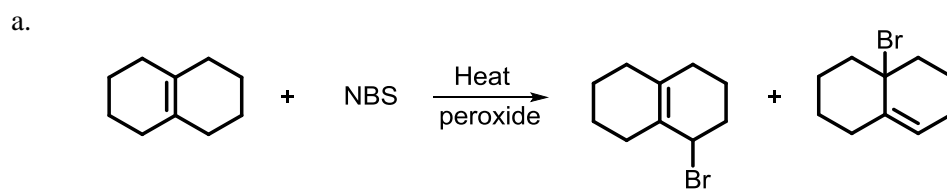
[II] Draw the product(s) of each of the following reactions, disregarding stereoisomers (3 points)



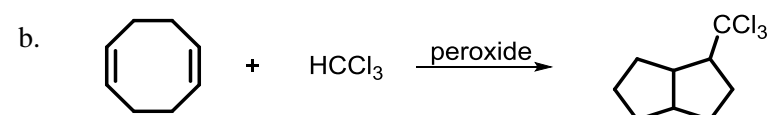
[III] Draw the major product(s) of each of the following reactions. Include stereoisomers (4 points)



[IV] Propose a mechanism for the following mechanism. (4 points)



Problem 32



Problem 46